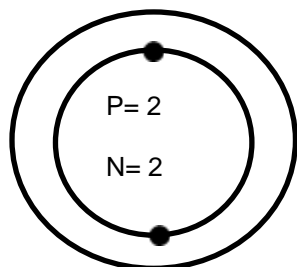


On the lines below the atomic models, write the name of the atom, its atomic number, atomic mass (rounded to nearest whole number) and number of protons.

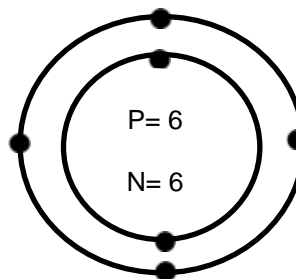


Element Name _____

Atomic Number _____

Atomic Mass _____

Number of Protons _____



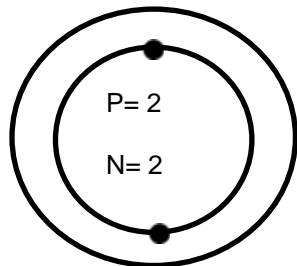
Element Name _____

Atomic Number _____

Atomic Mass _____

Number of Protons _____

On the lines below the atomic models, write the name of the atom, its atomic number, atomic mass (rounded to nearest whole number) and number of protons.

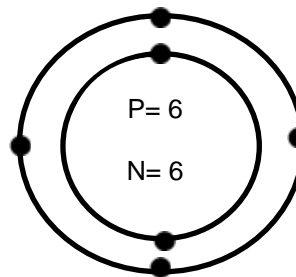


Element Name _____

Atomic Number _____

Atomic Mass _____

Number of Protons _____



Element Name _____

Atomic Number _____

Atomic Mass _____

Number of Protons _____